

Advanced Level 19 Lesson


LESSON 19

THINK QUARTERS



Does counting by 25 seem hard to you?


Try thinking of quarters.



Think of counting out \$5 in quarters.

25	50	75	100
125	150	175	200
225	250	275	300
325	350	375	400
425	450	475	500

What pattern do you see?




$125 + 25 + 25 = ?$

$75 + 25 + 50 = ?$

Use that pattern to help you add these in your head.

TRY THESE IN YOUR HEAD.

Think quarters.



1. $50 + 25$

2. $150 + 25$

3. $250 + 25$

4. $225 + 25 + 25$

5. $100 + 25 + 25$

6. $350 + 25$

7. $75 + 50$

8. $225 + 50$

9. $250 + 75 + 25$

10. $125 + 25 + 50 + 25$