



FIRST ADDEND

SECOND ADDEND



Write the problem here:

30 + 40 =     



How are these alike?


40 + 60

70 + 20

30 + 50

30 + 10

TRY THESE IN YOUR HEAD.



1. 30 + 50

3. 50 + 10

7. 60 + 60

2. 40 + 20

4. 80 + 50

8. 70 + 80

5. 70 + 30

9. 30 + 90

6. 40 + 20

10. 80 + 20