




Show a number.

Then add . . .



Write the problem: _____ + _____ = _____

How would we show these with base ten blocks?



$63 + 30$

$27 + 50$

$41 + 40$

TRY THESE IN YOUR HEAD.



1. $32 + 20$

3. $16 + 40$

7. $45 + 70$

2. $43 + 50$

4. $67 + 30$

8. $19 + 40$

5. $66 + 20$

9. $55 + 10$

6. $27 + 50$

10. $44 + 30$